

1. Choose the correct option.




The distance between the two houses is _____ sticks.

- (A) 5 (B) 6 (C) 7 (D) 8
2. What is the position of Rishi in the line ?


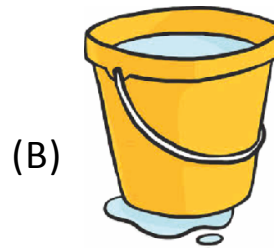


- (A) 5th (B) 3rd (C) 4th (D) 2nd
3. What is the length of the garland ?



- (A) 10 cm (B) 6 cm (C) 8 cm (D) 12 cm

4. Which container holds more quantity of water ?



5. Choose the number that replaces the question mark.




(A) 4

(B) 5

(C) 6



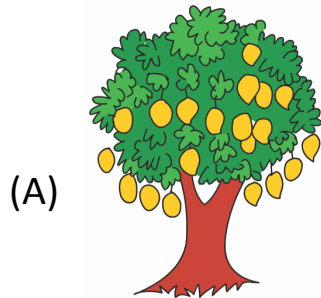
(D) 3

6. In which season are these items used ?



- (A) Summer season (B) Rainy season
(C) Winter season (D) Both (A) and (C)

7. Which of these is a climber ?


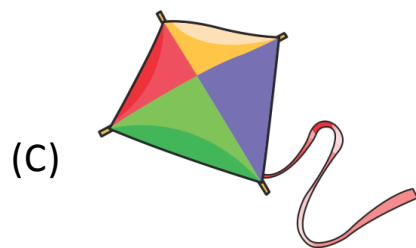
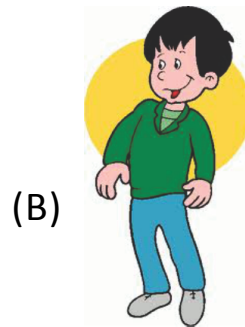



8. Complete the given correlation.

Rose : Shrubs :: Mango : ?

- (A) Tree (B) Climber (C) Shrubs (D) Herbs


9. Which option does not move on its own ?



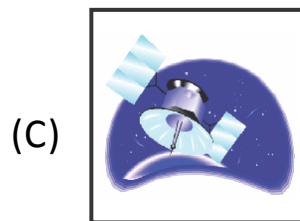
10. Which option gives us heat and light ?



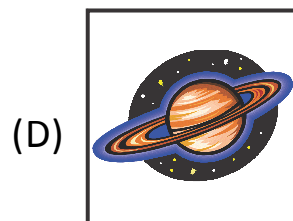
Moon



Sun



Satellite



Planet