

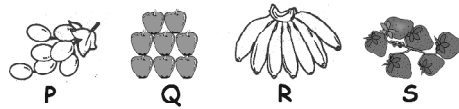
1 A pattern of some shapes is given.



Which shape will be the ninth in the pattern ?

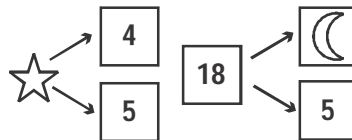
- (A)  (B)  (C)  (D) 

2 Which pair has the same number of fruits ?



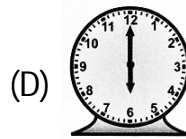
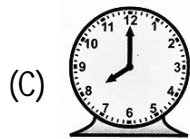
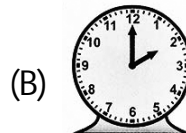
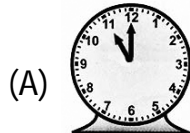
- (A) P, R (B) Q, S (C) P, S (D) P, Q

3 What is the sum of  and  ?

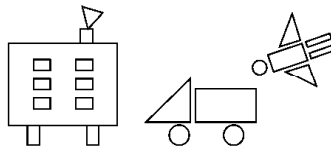


- (A) 13 (B) 9 (C) 10 (D) 22

- 4 Select the correct clock face that shows an ideal dinner time.




- 5 How many fewer triangles than rectangles are there in the given figure ?



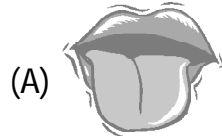
- (A) 9      (B) 10      (C) 14      (D) 4

- 6 The diagram given below shows that living things



- (A) grow.      (B) breathe.  
 (C) respire.      (D) move.

7 → Which sense organ have taste buds that helps us to know the taste of food ?



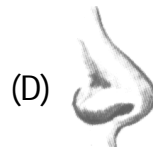
Tongue



Eye



Ear



Nose

8 → What is X in the given rhyme on traffic signal ?

**" X " light. "X" light,  
what do you say ?  
"I say don't stop go right away."**

(A) Red

(B) Yellow

(C) Green

(D) Orange

9 The figure given below shows ice cubes.



Ice cubes

Ice cubes are the \_\_\_\_\_ form of water.

- (A) solid (B) liquid  
(C) gas (D) none of these

10 Who lay eggs ?

