



UNIFIED COUNCIL

An ISO 9001:2008 Certified Organisation



Test • Assess • Achieve

NATIONAL LEVEL SCIENCE TALENT SEARCH EXAMINATION


Solutions for sample questions

Class : 2

Mathematics

1. (B) Total number of parts in figure = 9
Number of unshaded parts = 5
Fraction of figure not shaded = $\frac{5}{9}$
2. (B) According to the given figure,



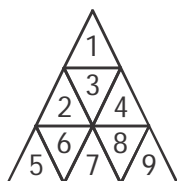
Mass of  = 100 g + 100 g +

100 g + 100 g = 400 g

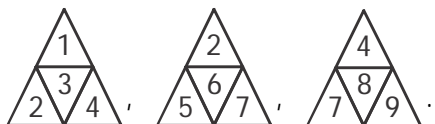
Given mass of the basket = 130 g

∴ The mass of the apples = (400 – 130) g
= 270 g

3. (B)



The triangle made up of 4 small triangles are 3 in number. They are



4. (A) $7 \times \boxed{4} = 28$
 $4 \times \boxed{6} + 4 = 24 + 4 = 28$
 $\Rightarrow 7 \times \boxed{4} = 4 \times \boxed{6} + 4$
= 8
5. (C) Length of Line P = 5 units
Length of Line Q = 5 units
Length of Line S = 3 units

Length of Line R = 8 units
∴ Line P is shorter than Line R.

General Science

6. (A) We eat the seeds of a pomegranate.
7. (A) Dogs are kept in Kennels, fish in aquarium, hens in coops and rabbit live in burrows.
8. (B) The process 'X' in the given figure is evaporation.
9. (C) In the given figure of human leg, P is thigh, Q is knee and R is ankle.
10. (A) Clouds are non-living things.