

- 1 The given clock is 15 minutes slow. What is the correct time?



- (A) Quarter past 3      (B) Half past 4  
 (C) Quarter to 4      (D) Quarter past 4

- 2 Which of the following statements is correct?

- (A)  $5 \times 2 = 10 + 10$   
 (B) 2 groups of 9 = 6 groups of 3  
 (C)  $3 \times 4 = 4 + 4 + 4 + 4$   
 (D) 4 groups of 2 = 2 + 4

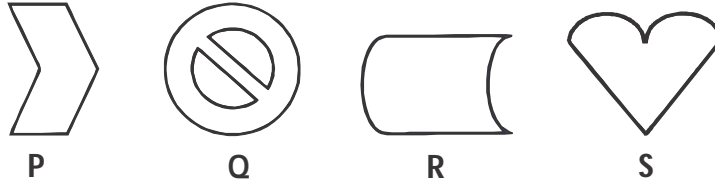
- 3 Given that  +  +  +  = 12 and

$$\text{book icon} + \text{pencil icon} = 9.$$

What is the value of  ?

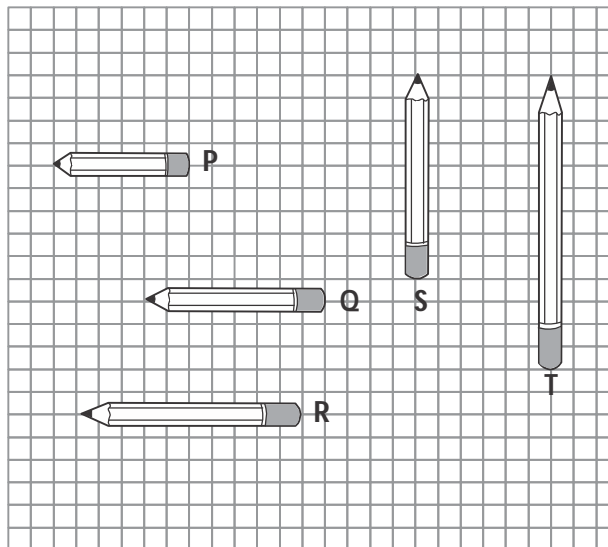
- (A) 4      (B) 5      (C) 6      (D) 10

4 Which of the following have 2 curved lines only?




- (A) P and Q                      (B) P and R  
(C) Q and R                      (D) R and S

5 Identify the arrangement of the pencils in ascending order of their heights.






- (A) PQRST                      (B) PQSTR  
(C) PQSRT                      (D) PROST

6 In which part of the picture is the ball (⊙) hidden?




7 Which one of the following shapes does not belong to the group?



8 If  = 4 and  ×  = 8, what is the value of ?

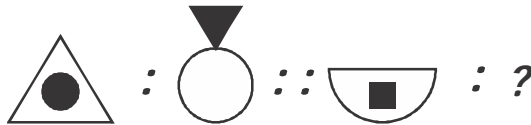
- (A) 16      (B) 8      (C) 5      (D) 2

9 → Count the number of rectangles in the given figure.




- (A) 20      (B) 15      (C) 16      (D) 18

10 → What is the missing figure in the second pair?



- (A)      (B)      (C)      (D)

- 11** On which key is the  symbol found?
- (A) Shift key                      (B) Arrow key  
(C) Ctrl key                        (D) Enter key
- 12** Which button of a mouse moves a page up or down on a computer screen?
- (A) Right button                  (B) Scroll button  
(C) Left button                    (D) Both (A) and (C)
- 13** Which icon is used to show the contents inside the computer?
- (A) My Computer                  (B) Control panel  
(C) Recycle Bin                    (D) Internet Explorer
- 14** What is the purpose of joystick?
- (A) Printing                        (B) Weather forecast  
(C) Word Processing              (D) Gaming
- 15** Which of the following is useful to play and hear sound on a computer?
- (A) Sound card                    (B) Speakers  
(C) Scanner                        (D) Both (A) and (B)

16 Which word is most suitable for the given sentence?

I am waiting \_\_\_\_\_ the bus to come.

- (A) to (B) from (C) at (D) for

17 Identify the word with INCORRECT spelling.

- (A) Twelth (B) Promise  
(C) Chief (D) Library

18 Find a meaningful word that can be formed from the letters O, L, A and G.

- (A) Aglo (B) Goal (C) Oagl (D) Galo

19 Which order of these words gives a meaningful sentence?

<u>my</u>	<u>love</u>	<u>I</u>	<u>parents</u>
P	Q	R	S

- (A) Q, R, P, S (B) R, Q, P, S  
(C) P, S, R, Q (D) Q, P, S, R

20 Which of the following words is the second in a dictionary?

- (A) Phonic (B) Picture  
(C) Phrase (D) Pizza

