
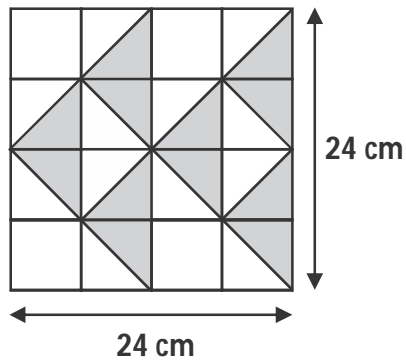


- 1 How many angles inside the figure are smaller than a right angle?



- (A) 1      (B) 2      (C) 3      (D) 4
- 2 A number is between 45 and 60. This number gives a remainder of 1 when divided by 7. The same number gives no remainder when divided by 3. What is the number?
- (A) 57      (B) 54      (C) 68      (D) 58
- 3 120 cartons of soft drinks can be packed into 360 packets of 8 soft drinks each. If 80 similar cartons of soft drinks are to be packed equally into boxes, how many boxes of 15 are there now?
- (A) 128      (B) 192      (C) 196      (D) 240

- 4 Find the area of the shaded region formed from 16 square tiles.



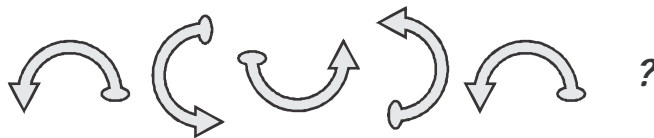
- (A)  $576 \text{ cm}^2$  (B)  $288 \text{ cm}^2$   
(C)  $216 \text{ cm}^2$  (D)  $432 \text{ cm}^2$
- 5 Aditya is facing North-east after making a  $135^\circ$  clockwise rotation followed by a  $315^\circ$  anti-clockwise rotation. In which direction was he before he made the turns?
- (A) North-west (B) East  
(C) South (D) South-west

6 Which of the following figures replace the question mark?



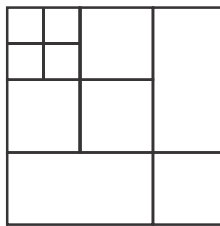
- (A) (B) (C) (D)

7 What comes next in the given series?








- (A) (B) (C) (D)

8 How many squares can you find in the given figure?



- (A) 12 (B) 13 (C) 14 (D) 16

9 Which of the following is the image of  in a vertical mirror?

- (A)  (B)  (C)  (D) 

10 Find the matching pair.

**EE** is to **FG** as **CE** is to ?

- (A) **CE** (B) **ГБ** (C) **EE** (D) **CG**

11 What is a popular way to learn about computers without ever going to a classroom?

- (A) isolated learning (B) i-learning  
(C) close learning (D) e-learning

12 What is the shortcut key to activate windows explorer?

- (A)  + E (B)  + F  
(C)  + R (D)  + M

- 13 Which key is used to indent the first sentence of a paragraph in MS-Word document?  
(A) Tab (B) Shift  
(C) Right Arrow (D) Enter
- 14 Which device among following is used for sending digital data over a phone line?  
(A) USB (B) Scanner  
(C) Printer (D) Modem
- 15 What does docx stands for?  
(A) Document Xtreme (B) Document Extended  
(C) Document Extra (D) Document Xerox

**Class – V****English**

- 16 Which word is spelt INCORRECTLY?  
(A) Leisure (B) Burglar  
(C) Secretary (D) Aquire
- 17 Identify the word that can correct the error in the given sentence.
- My son is old enough to look for himself now.
- (A) around (B) after  
(C) to (D) at

18 ➔ What is the single word that means “a story which is not true”?

- (A) Morsel                      (B) Fiction  
(C) Quiver                      (D) Mock

19 ➔ Identify the order of the given words that makes a meaningful sentence.

<u>of others</u>	<u>make fun</u>	<u>never</u>	<u>we should</u>
P	Q	R	S

- (A) S, Q, P, R                      (B) S, R, Q, P  
(C) S, P, Q, R                      (D) R, S, Q, P

20 ➔ Find the antonym of “DEARTH”.

- (A) Abundance                      (B) Sufficiency  
(C) Scarcity                      (D) Extravagance

