

01

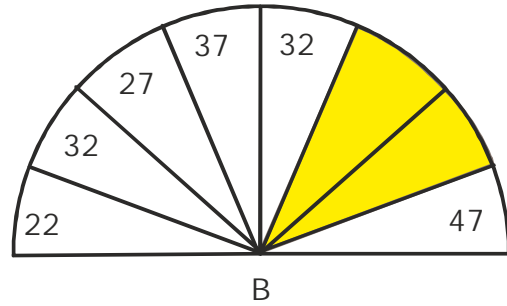
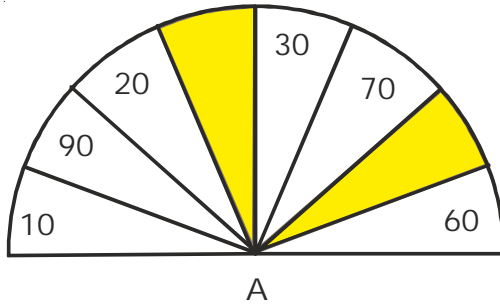
There were 28 boys and 46 girls in a hall.

- (a) How many boys and girls were there in the hall altogether ?
- (b) Some boys entered the hall after some time. The total number of boys and girls in the hall became 90. How many boys entered the hall ?



Your solution here:

**02** Fill in the missing numbers in the shaded regions to complete the number patterns.



Your solution here:

03


Arrange the following numbers in descending order.



Your solution here:

04

Complete the following patterns by filling in the missing numbers.



Your solution here:

05

Without repeating the same digit, use the numbers on the T-shirts to form



- (a) three different two-digit numbers that are more than 50 but less than 85.
- (b) the greatest and the smallest two-digit numbers.

Your solution here:

06

Shan is thinking of a 2-digit number. The digit in the ones place is 5 less than 6. The digit in the tens place is 2 more than the digit in the ones place. What is the 2-digit number that Shan is thinking of ?

Your solution here: