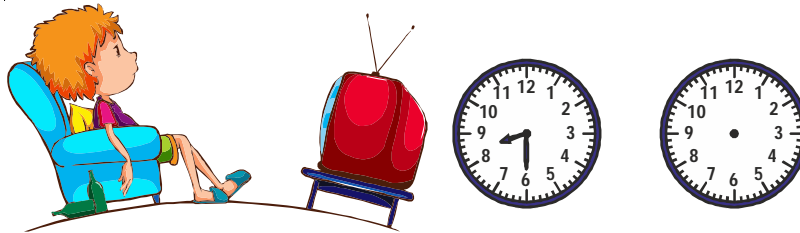


TIME


01 Rishi's favourite television program started at half past 8. The program lasted for 3 hours. At what time did the program end? Draw the time on the clock on the right.



Start time = 8:30
Duration = 3 hours
End time = 8:30 + 3 hours = 11:30



02 Mrs. Nadiya started doing the housework at 8 o'clock. She spent 1 hour ironing the clothes and 2 hours cleaning the house before having lunch. At what time did she have her lunch? Show the time on the clock.

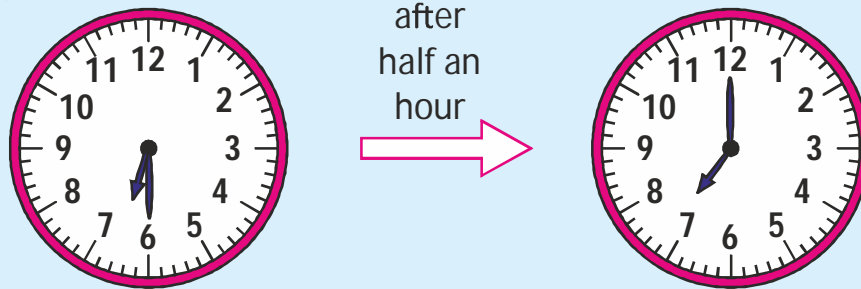


Started time = 8 'o clock
Time spent on ironing = 1 hour
Time spent on cleaning clothes = 2 hours
Time she had her lunch = 8 + 3 hours = 11:00



TIME

03 Pranith wakes up at 7 o'clock in the morning. His brother wakes up at half past 6 in the morning. Who wakes up earlier.



7'o clock comes after half past 6. So Pranith's brother wakes up before him. Pranith's brother wakes up earlier.

04 Mrs. Leena took 1 hour to wash the laundry and 1 hour to prepare dinner. If she started at 5 o'clock, at what time did she finish preparing dinner ?

$$1\text{ h} + 1\text{ h} = 2\text{ h}$$



TIME

05

At what time will the our hand and the minute hand of a clock form a straight line (not one over the other) ? Colour the box which shows this time.

5 o'clock

12 o'clock

Half past 12

6 o'clock



(6 o'clock)

5 o'clock

12 o'clock

Half past 12

6 o'clock