


01 Living things move in search of food, shelter and water.
Complete the blanks given below

1

A frog

j _ _ _ s



2

A butterfly

f _ e l s



3

A cat


w _ l _ s



4

A fish

_ w _ m s



02 Look at the pictures below and put a tick (✓) or (✗) in the boxes.

	Needs food and water	Feels	Can move around on its own
			
			
			
			
			
			
			

03 Fill in the blanks. Put these words in correct places.

Natural non-living	Fins	Non-living
Man made non-living	Hen	Wings



1. If you hit a table, it will not respond because table is a




2. Fish swim with the help of



3. Insects and birds fly from one place to another with the help of their



4. Rock is a






5. The _____ reproduces by laying eggs.

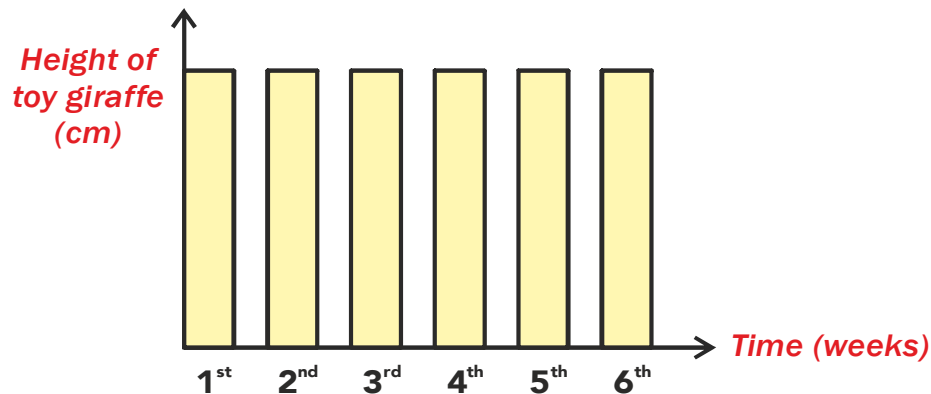


6. A van is a _____ thing that move with the help of a machine.

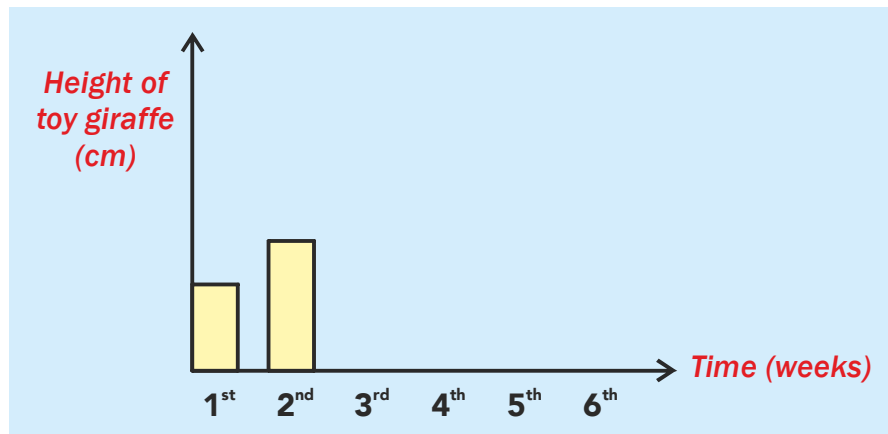
04 Each of the following sentences tells us what a living thing can do. Match correctly each sentences in X to another sentence in Y once.

	X		Y
(i)	<p>A jackfruit seed grows to become a jackfruit tree.</p> 	(a)	Living things can grow.
(ii)	<p>An eagle flies in the sky.</p> 	(b)	Living things can respond to changes around it.
(iii)	<p>An earthworm crawls into the soil when light is shone at it.</p> 	(c)	Living things can move by themselves.

05 The graph below shows correctly the height of a toy giraffe over a period of 6 weeks.



- (a) In the graph provided below, draw correctly the height of a new-born rabbit over a period of 6 weeks. The first 2 weeks have been done for you.



- (b) Based on the graph above, state one characteristic of a living thing.

A living thing can