


**01**

Look at the pictures given below.




State any one similarity and difference between them ?

Your solution here:


**02**

Number the organisms in their correct sequence to complete the transfer of energy in a food chain.



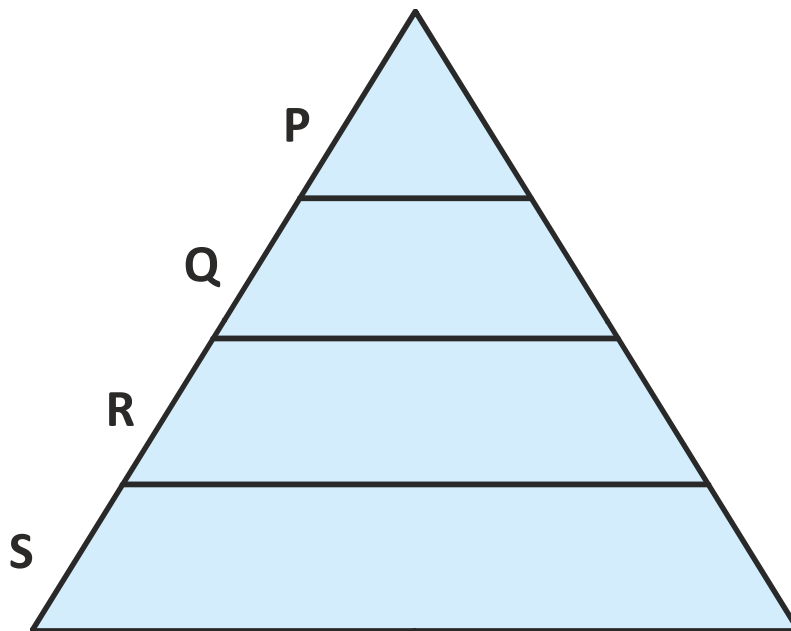
Your solution here:

**03** Arrange the given components in an order of energy flow observed in a food chain.




Your solution here:

**04** Complete the given food pyramid:  
Label the food components based on body requirement.



**05** Identify the plants shown in a picture. Note down their edible parts and products respectively in the boxes provided below.



<b>P</b>	Your solution here:
<b>Q</b>	Your solution here:
<b>R</b>	Your solution here:
<b>S</b>	Your solution here:
<b>T</b>	Your solution here:

**06** Study the food chain given below. Categorize the components according to their respective food habits.

