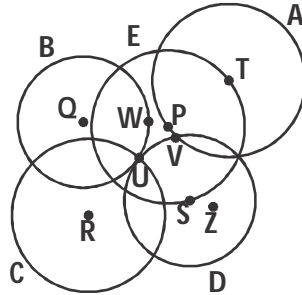


1 ➔ Which is the centre of the circle E?

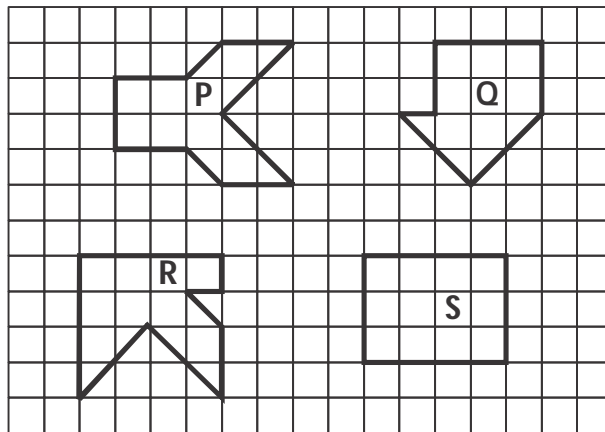


- (A) U      (B) V      (C) P      (D) W

2 ➔ I am a 2-digit number. If 28 is added to me, I become a 3-digit number. If 63 is taken away from me, I become a 1-digit number. What number am I?

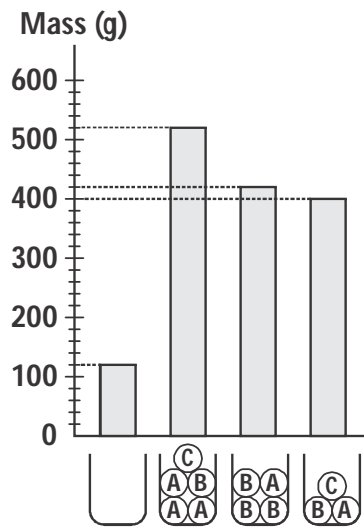
- (A) 69      (B) 92      (C) 70      (D) 72

3 ➔ Which figure P, Q, R or S has the largest area?








- (A) P      (B) Q      (C) R      (D) S

- 4 The bar graph shows the mass of a beaker when empty and when different balls are placed in it. What is the mass of (B)?



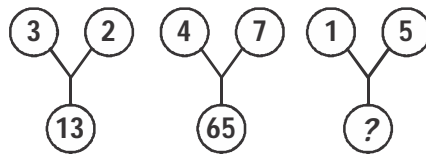
- (A) 60 g    (B) 120 g    (C) 80 g    (D) 40 g

- 5 Given that  ×  = 20 and  -  = 8, what is the value of ?
- (A) 12    (B) 2    (C) 10    (D) 6

6 Find the odd one.

- (A) (B) (C) (D)

7 Find the missing number.



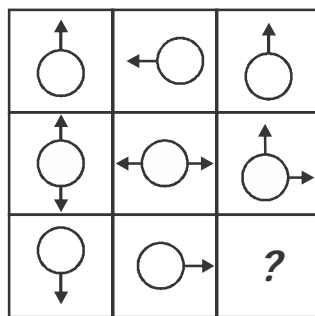
- (A) 11 (B) 26 (C) 15 (D) 80

8 Which pair of letters represent the shape ?



- (A) NB (B) MB (C) MC (D) AM

9 Identify the missing figure in the pattern.



- (A) (B) (C) (D)

- 10 Which letter in the word DESTINATION occupies the same position as it does in the English alphabet?  
(A) O (B) E (C) I (D) T

**Class – IV****Computers**

- 11 If a Windows program has become unresponsive, which keys do you press to open the Windows Task Manager?  
(A) Shift, Tab, Enter (B) Home, Control, Shift  
(C) Space bar, F1, Tab (D) Control, Alt, Delete
- 12 Which of the following device is useful to take hardcopy of any graphic pictures from any website?  
(A) Keyboard (B) Printer  
(C) Monitor (D) Scanner
- 13 Lahari is in the process of editing her fantasy story. What does she need to click on in the “File” menu to find her saved story?  
(A) New (B) Open (C) Save (D) Save As
- 14 Which of the following is incorrect statement?  
(A) Notepad is text editor.  
(B) Notepad is component of Microsoft Windows.  
(C) The default file name of notepad is Untitled.  
(D) Notepad file extension is .note.

15 What does BMP stands for?

- (A) Binary Mark Point      (B) Byte Map  
(C) Bit Map                      (D) Book Mark point

**Class – IV**

**English**

16 Identify the meaning of PROHIBIT.

- (A) Prescribe                      (B) Provide  
(C) Forfeit                        (D) Forbid

17 Find the *MISSPELT* word.

- (A) Category                      (B) Memento  
(C) Neice                         (D) Weather

18 Identify the pair of words that must be interchanged to make sense in the given sentence.

"Esha ran jungle into the straight".

- (A) into, jungle                      (B) jungle, straight  
(C) the, into                        (D) ran, straight

19 Which of the following is the last when the given words are arranged in alphabetical order?

- (A) Initiate                        (B) Inflict  
(C) Inflate                         (D) Inhibit



**What is the feminine gender of 'STAG'?**

- (A) Hind                      (B) Buck  
(C) Jenny                     (D) Filly

